

Unit 2 - Lesson 5

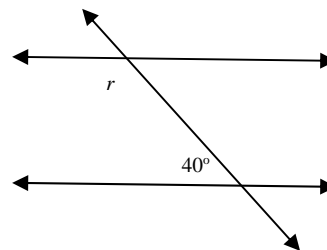
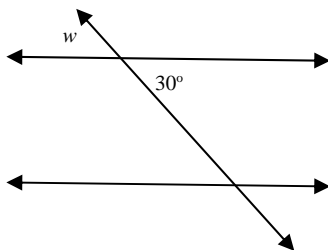
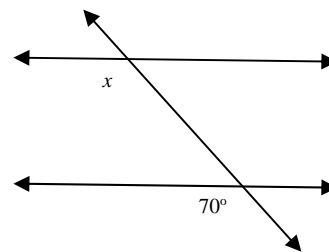
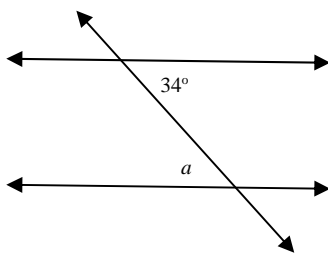
Angles within Parallel Lines – Day 1

Parallel Lines : _____

Transversal : _____

Diagram:

Determine the measure of the unknown angle:



Summary

Opposite Angles - make a _____ pattern and are _____

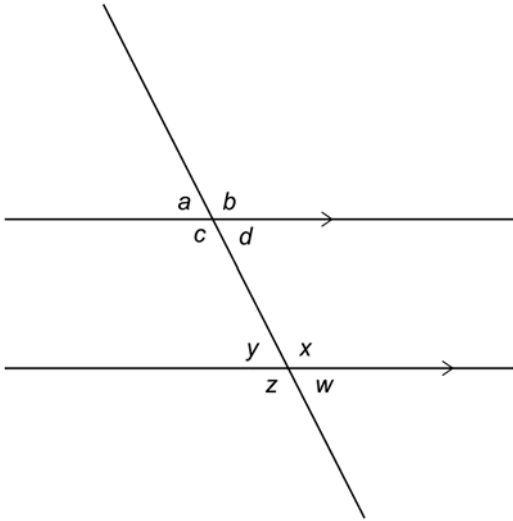
Alternate Angles - make a _____ pattern and are _____

Corresponding Angles - make a _____ pattern and are _____

Interior Angles - make a _____ pattern and _____

Unit 2 – Lesson 5 Day 1 Worksheet

Name all pairs of alternate angles (2 total), corresponding angles (4 total), and interior angles (2 total).



Determine the angle measure indicated by each letter.

