




Mrs. Gates' Homework Practice

Monday	Tuesday	Wednesday	Thursday	Friday
<p>Happy New Year 2018! 8</p> <p>Make a list of goals you have for the new year ☺</p> 	<p>9</p> <p>Which three measurements are listed in order from shortest to longest?</p> <p>a) 2 m, 1 m 65 cm, 84 cm b) 84 cm, 1 m 65 cm, 2 m c) 84 cm, 2 m, 1 m 65 cm d) 1 m 65 cm, 84 cm, 2 m</p>	<p>10</p> <p>Mia reads 22 books in December and 39 books in January. Which estimate is closest to the total number of books Petra reads during these months?</p> <p>a)40 b)50 c)60 d)70</p>	<p>11</p> <p>Write step-by-step directions on how to make a hot chocolate. Be sure to use procedural words such as first, next, then, after that, finally, etc.</p>	<p>12</p> <p>Hand in your homework book to Mrs. Gates.</p> 
<p>15</p> <p>Write your WOW words 2 times each. First, write each word in UPPERCASE letters. Second, write in lowercase letters. Example: EARLY, early</p>	<p>16</p> <p>Isabelle has 5 dollars in quarters. How many quarters does she have?</p>	<p>17</p> <p>Adding My Words. Each letter has a value. Consonants are worth 10 and Vowels are worth 5. Choose 3 of your wow words, then add up the value of each spelling word. Example: "Said" $10 + 5 + 5 + 10 = 30$</p>	<p>18</p> <p>Which of the following has the same value as $38 + 29$?</p> <p>a) $40 + 30$ b) $30 + 20 + 7$ c) $30 + 20 + 17$ d) $40 + 20 + 8 + 9$</p>	<p>19</p> <p>Hand in your homework book to Mrs. Gates.</p>
<p>22</p> <p>Ella uses \$4.50 to buy crayons. She is given 2 dimes in change. How much do the crayons cost? Show your show.</p>	<p>23</p> <p>Pyramid Words. "Pyramid write" your words. Example: "friend"</p> <p style="text-align: center;">f fr fri frie frien friend</p>	<p>24</p> <p>Lauren has \$10.00 in her pocket. She wants to buy 2 books that cost \$4.99 each. Does she have enough money? Show your work.</p>	<p>25</p> <p>Write your WOW words in ABC order.</p>	<p>26</p> <p>Hand in your homework book to Mrs. Gates.</p> 
<p>29</p> <p>Marley has 2 dimes, a nickel and 3 quarters in her purse. Grace has 2 loonies, a toonie and 3 \$5.00 bills in her purse. How much money do the girls have altogether?</p>	<p>30</p> <p>Write your words in ABC order. In another column, write the words in reverse ABC order. Draw a line between the two columns to match the pairs of words.</p>	<p>31</p> <p>Julian is reading a book that has 182 pages. He has 143 pages left to read. How many pages has he read?</p>	<p>1</p> <p>Write step-by-step directions on how to make a snowman using procedural words such as first, next, then, after that, finally, etc.</p>	<p>2</p> <p>Hand in your homework book to Mrs. Gates.</p>

 Mrs. Gates' Homework Practice 